





Year 2 Home Learning Pack 3





	Phonics	GPS	English	Maths
Monday	Phase 5 - I Spy and Read worksheet	Spelling – months of the year	Comprehension – Read the text and answer the questions	Multiplication – 2x, 5x 10 x tables
Tuesday	Phase 5 – Alternative Spelling for igh Spell/ write the words.	Spelling – days of the week	Correct the spelling mistakes	5x tables activities
Wednesday	Blending Bingo	Correct the punctuation	Fact finding – oceans and continents	Telling the time board game
Thursday	Spelling ay and a-e words	Word search – writing sentences	Writing facts – the 7 continents	Mental maths – online game
Friday	Buried Treasure game – practise blending	Word search – writing questions and exclamations.	Design a fact sheet – choose an Ocean	Tell the time

Phonics - Monday

I Spy and Read - Read each word and then draw a line to the matching picture.

clay		cloud
pie		sea
treat		cried
sprout		crayon

























Challenge: Can you spell a word to match one of the pictures?

boy		girl
skirt		blue
glue		toys
statue		argue

Challenge: Can you spell a word to match one of the pictures?

Phonics - Tuesday

Alternative Spellings for igh

igh		ie		i-e		y	
							
							
							
							
							
							

Phonics - Wednesday

To play the Blending Bingo game follow the link below to the Topmarks website.

<https://www.ictgames.com/mobilePage/bingoOriginal/index.html>



Blending Bingo

Play Bingo in a class situation or just use on an individual basis to practise your blending skills. The words match those in Letters and Sounds.

Not Flash

Phonics - Thursday

'ay' Spelling Activity

1. Trace over 'ay'.

ay ay ay ay ay
ay ay ay ay ay


2. Just add 'ay'.

tr__	st__
spr__	cr__on
pl__	cl__
d__	h__

3. Write the correct 'ay' words under the pictures.







'a-e' Spelling Activity

1. Trace over 'a-e'.


a-e a-e a-e a-e
a-e a-e a-e a-e

2. Just add 'a-e'.

g__t__	g__z__
fl__m__	sn__k__
c__k__	r__c__
sp__c__	am__z__

3. Write the correct 'a-e' words under the pictures.







Phonics - Friday

Read the words and decide if they are real or not.

<https://www.phonicsplay.co.uk/resources/phase/4/buried-treasure>



GPS - Monday

Practise the words on this list using look, say, cover, write and check.

Hint: these words are tricky – you just need to learn how to spell them by practising. Don't forget that these words have capital letters.



Word	1 st try	2 nd try	3 rd try
January			
February			
March			
April			
May			
June			
July			
August			
September			
October			
November			
December			

GPS- Tuesday

Days of the Week Spellings

Tick the columns as you follow the instructions from left to right. Make sure you spell the words in the 'write' column. If you spell the word incorrectly, write it again correctly in the 'correction' column.

	Look	Say	Cover	Write	Check	Correction
Monday						
Tuesday						
Wednesday						
Thursday						
Friday						
Saturday						
Sunday						

GPS - Wednesday

Correct the Sentence Punctuation

Write the correct sentence underneath by adding in capital letters, full stops and question marks.

1. my brother's dog is called tess

2. on sunday she went to the park

3. the titanic sank in 1912

4. toby and mark are going to spain in march

5. martha took her children to the zoo yesterday

6. when i go to the shop, i will get some crisps

7. sameera and i are going to town on friday

8. did you sell buns at the fair

9. my mum has a cat he is called tom

10. have you got a dress for the prom

GPS- Thursday

Can you find the words?

Write a sentence for each word you find.

ie, i-e, igh, y

a	u	o	s	k	y	m	f	l	y
f	i	v	e	x	p	o	v	z	c
c	a	m	r	c	r	y	a	r	m
u	o	t	i	e	m	o	r	p	l
x	l	i	e	v	a	m	u	o	v
z	m	l	o	k	n	i	g	h	t
a	o	b	i	k	e	z	x	t	c
p	i	e	v	x	n	i	g	h	t
l	u	c	s	l	i	d	e	u	r
l	i	g	h	t	m	a	p	z	a

cry 

sky 

fly 

pie 

lie 

tie 

five 5

slide 

bike 

knight 

light 

night 

GPS - Friday

Can you use the words from yesterday's word search and write a question and/or an exclamation for each word?

English - Monday

Comprehension - Read the text and answers the questions in complete sentences.

A New Pet

Tom was six. He lived in a flat with his Mum. The flat was on the top floor. It was very high up!

One day, Tom said to his Mum, "Mum, can I have a dog?"

But Mum shook her head and said, "No Tom, you can't have a dog. There are no dogs allowed in a flat."

Tom wanted to cry. Then he said, "Mum, can I have a cat?"

But Mum shook her head and said "No Tom, you can't have a cat. There are no cats allowed in a flat."

Now Tom did start to cry, "I want my own pet!" he shouted.

Mum patted Tom on the back and gave him a kiss, "Don't cry Tom, I will see what I can do."

The next day, when Tom got home from school, there was a small cage on the table. Tom was excited! He ran to look in the cage. In the cage was an orange hamster! Mum put the hamster in Tom's hands.

Tom smiled and said, "I will call it Rusty. Thank you, Mum!"

1. How old is Tom?
2. Where does Tom live?
3. What pets did Tom want?
4. How does Tom feel when Mum says that dogs are not allowed in the flat? How do you know this?
5. How does Mum try to make Tom feel better?
6. Why was Tom excited when he saw a cage on the table?
7. What was in the cage?
8. Why did Tom call his pet Rusty?
9. How do you know that Tom is happy about his new pet?
- 10 Do you have a pet, or would you like one? What sort of pet, and why?

English - Tuesday

Correct the Spelling Mistake

The spelling mistakes in these sentences have been circled. Write the correct spelling for each circled word in the box.

1. "I wood like to come to your party." said Jo.
2. Mary wore her coat becoz it was cold.
3. The cup did not brayk when it fell on the floor.
4. "I can proov that it was you." said Mai.
5. "Is there enny more pudding?" asked Sally.
6. The garden looked very prity.
7. "Please can you pars the milk?" asked dad.
8. Mt Jones was late for work.

Now use the correct spelling of the words that have been circled to write your own sentences. Use conjunctions (e.g. and, if, because, so) to extend your sentences.

English - Wednesday

Oceans and Continents

Follow the link, then click on a continent or ocean to learn its name.

<https://www.sheppardsoftware.com/geography/world/continents-oceans-tutorial/index.html>

Follow the link and see if you can remember where the continents and oceans are.

<https://www.sheppardsoftware.com/geography/world/continent-oceans-game-1/>

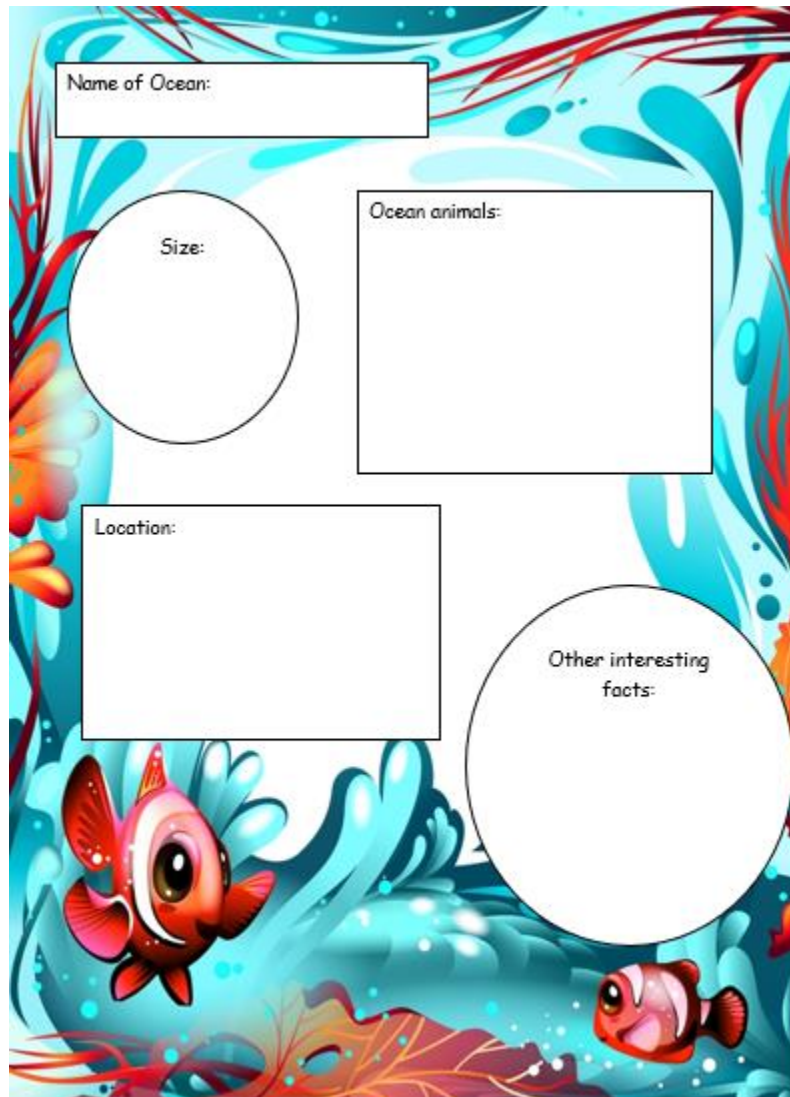
Follow the link to listen to this song, naming and ordering the size of the 7 continents.

<https://www.youtube.com/watch?v=K6DSMZ8b3LE>

Can you write the continents in order from largest to smallest? (Listen to the song to help you.)

English - Thursday

Can you research the 7 continents of the world and write at least 3 interesting facts about each one?



Name of Ocean:

Size:

Ocean animals:

Location:

Other interesting facts:

English - Friday

Can you create your own fact file about one of the oceans of the world?

Maths - Monday

$2 \times 2 =$	$4 \times 2 =$	$8 \times 5 =$	$3 \times 10 =$	$5 \times 6 =$	$12 \times 2 =$
$10 \times 4 =$	$2 \times 8 =$	$12 \times 10 =$	$5 \times 5 =$	$9 \times 2 =$	$3 \times 5 =$
$6 \times 10 =$	$7 \times 2 =$	$8 \times 10 =$	$5 \times 10 =$	$1 \times 2 =$	$9 \times 10 =$
$11 \times 2 =$	$6 \times 2 =$	$5 \times 1 =$	$0 \times 2 =$	$10 \times 2 =$	$11 \times 5 =$
$3 \times 2 =$	$5 \times 0 =$	$2 \times 4 =$	$5 \times 4 =$	$0 \times 10 =$	$7 \times 5 =$
$2 \times 1 =$	$6 \times 5 =$	$10 \times 9 =$	$2 \times 9 =$	$2 \times 7 =$	$5 \times 9 =$
$5 \times 3 =$	$5 \times 2 =$	$10 \times 12 =$	$2 \times 10 =$	$10 \times 11 =$	$4 \times 5 =$
$10 \times 1 =$	$5 \times 8 =$	$5 \times 7 =$	$2 \times 11 =$	$5 \times 11 =$	$8 \times 2 =$
$9 \times 5 =$	$2 \times 6 =$	$1 \times 5 =$	$1 \times 10 =$	$2 \times 3 =$	$2 \times 12 =$
$10 \times 5 =$	$4 \times 10 =$	$10 \times 0 =$	$2 \times 5 =$	$10 \times 7 =$	$12 \times 5 =$
$11 \times 10 =$	$10 \times 6 =$	$5 \times 12 =$	$10 \times 10 =$	$10 \times 3 =$	$10 \times 8 =$
$7 \times 10 =$	$12 \times 10 =$	$2 \times 3 =$	$12 \times 5 =$	$10 \times 12 =$	$4 \times 10 =$
$5 \times 5 =$	$9 \times 2 =$	$3 \times 5 =$	$10 \times 10 =$	$5 \times 0 =$	$10 \times 1 =$
$2 \times 8 =$	$7 \times 2 =$	$5 \times 6 =$	$6 \times 3 =$	$12 \times 10 =$	$1 \times 5 =$

To play the times table game below follow the link to the Topmarks website.

<https://www.topmarks.co.uk/maths-games/hit-the-button>



Maths - Tuesday

5 Times Table Activities




Count in 5s and colour in the grid:

1	2	3	4	5	6	7	8	9	10
11	12	13	14	15	16	17	18	19	20
21	22	23	24	25	26	27	28	29	30
31	32	33	34	35	36	37	38	39	40
41	42	43	44	45	46	47	48	49	50
51	52	53	54	55	56	57	58	59	60
61	62	63	64	65	66	67	68	69	70
71	72	73	74	75	76	77	78	79	80
81	82	83	84	85	86	87	88	89	90
91	92	93	94	95	96	97	98	99	100

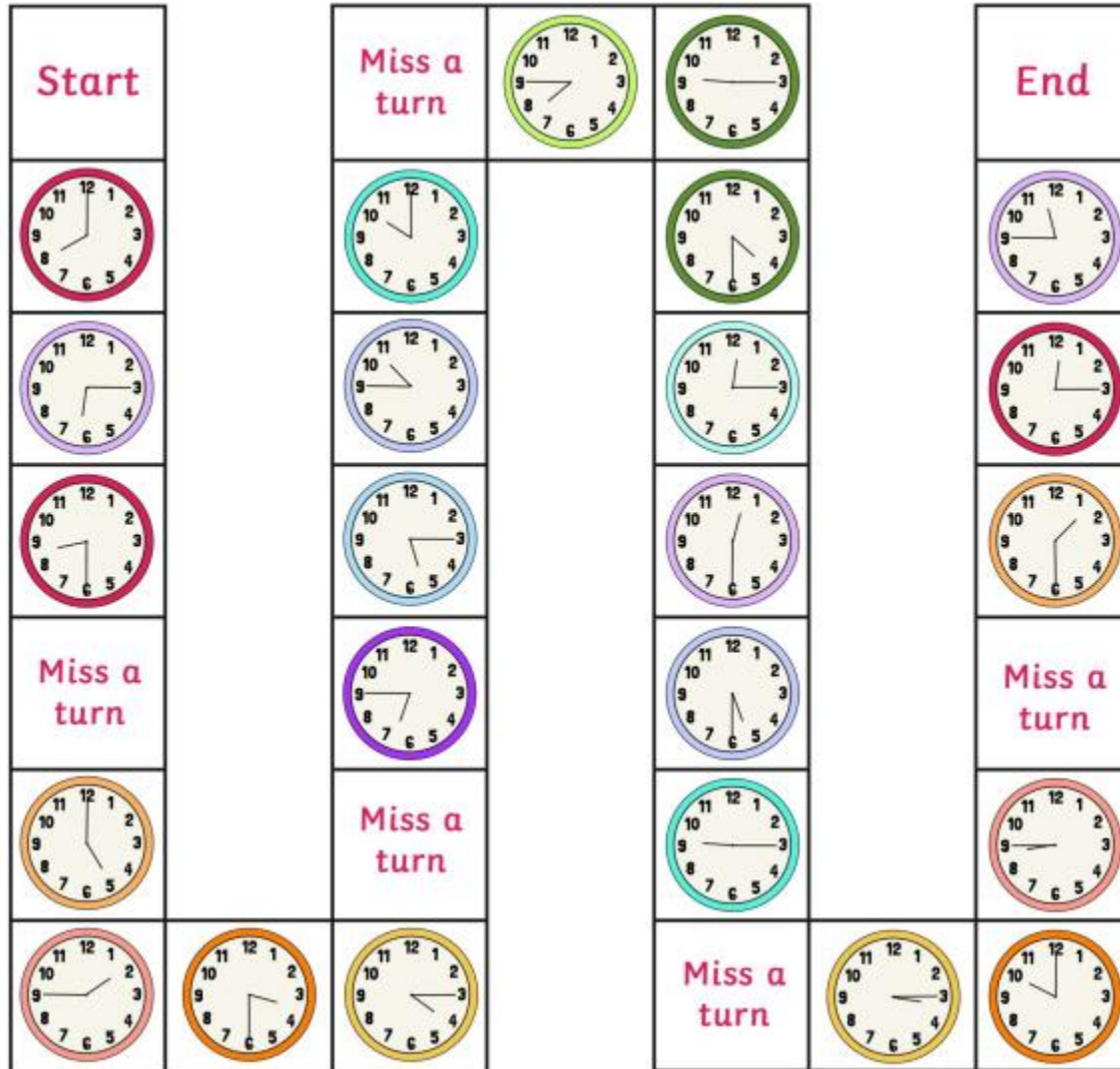
Work out these answers:

- a) $2 \times 5 =$ _____ d) $6 \times 5 =$ _____
 b) $4 \times 5 =$ _____ e) $7 \times 5 =$ _____
 c) $5 \times 5 =$ _____ f) $9 \times 5 =$ _____

How many are there?

- a)  _____ x _____ = _____
- b)  _____ x _____ = _____
- c)  _____ x _____ = _____

Maths - Wednesday



Telling the Time Board Game

What time is it?

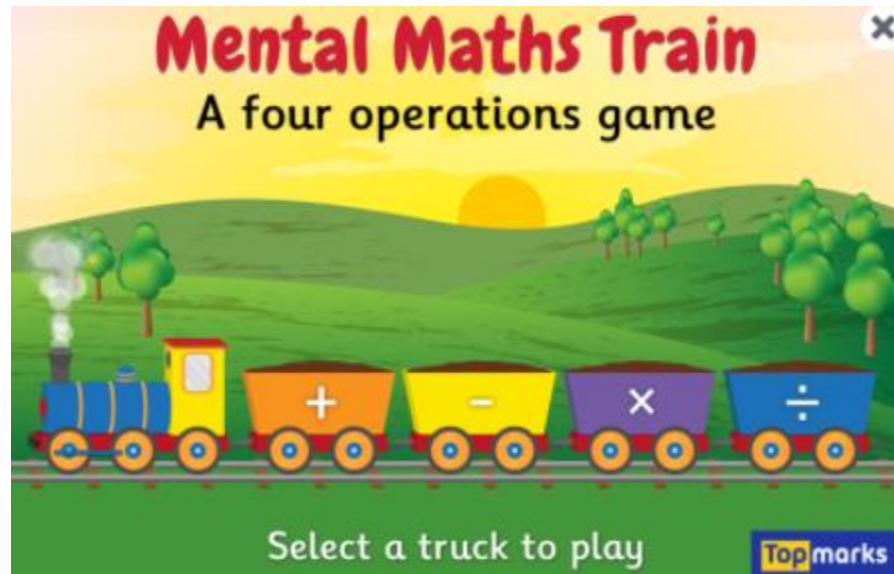
Roll a dice, move the number of spaces shown and read aloud the time shown on the clock. The first player to complete the board wins!



www.twinkl.com

Maths - Thursday

























<https://www.topmarks.co.uk/maths-games/mental-maths-train>



Practise your 2x, 5x, 10x tables

Maths - Friday

Can you write the times?

 _____	 _____	 _____	 _____	 _____	 _____
 _____	 _____	 _____	 _____	 _____	 _____
 _____	 _____	 _____	 _____	 _____	 _____
 _____	 _____	 _____	 _____	 _____	 _____

Ocean art and craft ideas

Can you design and make a cereal box aquarium?

